

Learning Made Easy Free 30-day learn from home worksheets, designed by a leading educationist.

“Learning comes a full circle when supported with paper-pencil activities”.

With this in mind, the Early Childhood Association of India has partnered with HP and created 30 day worksheet modules designed especially for your child. The printable modules are a reflection of innovation in learning. They are structured into a 30-day learning schedule that can supplement the education received by the child via their school.

At the end of the 30-day schedule, you will be able to see your child thrive in the following skills: expression, listening, literacy creativity, numeracy, general awareness, observation, comparison, social skills, critical thinking, speaking, high order thinking, imagination, aesthetics, etiquettes, self-awareness, self-management, coloring, drawing, writing, and many more.

Purposefully designed worksheets aid home learning. They are visually stimulating, fun, easy to read, and cost-effective when printed. The following developmental areas are addressed:

- a. Physical Health and Motor Development
- b. Language Development
- c. Cognitive Development
- d. Critical Thinking
- e. Social and Emotional Development
- f. Sensory and Perceptual Development
- g. Development of Creative and Aesthetic Appreciation
- h. Representing Objects, Events, Ideas in the Form of Drawing, and Coloring

We ensured activities are fun-based, engaging, and not ‘drill-based’. Parents can help kids develop autonomy, drive interest, and let them blend worksheets in their daily schedule.

- Dr. Swati Popat Vats.
President
Early Childhood Association
Association for Primary Education and Research

Skill Focus

Age Group	Approach	Cognitive skills	Scholastic aptitude	21st Century life skills
9-10	STEM based and application oriented	perception attention memory motor skills language visual and spatial description	Conceptual skill	Critical thinking Creativity Collaboration Communication Information literacy Media literacy Technology literacy Flexibility Leadership Initiative Productivity Social skills


Parents can download more free worksheets from www.printlearncenter.com or by sending a message via WhatsApp to +91 8800330330



Identify and write



Write the names and give example of any 2 books written by these famous authors from around the world.
















Composition



English is the most spoken language in the world; hence it is very important for everyone to learn it in any country around the world. Write an article of around 150 words on the importance of English language in your country.

A large writing area shaped like a scroll, with a grey shaded area at the top left and bottom left corners, and horizontal lines for writing.





Wordsearch



Below are 10 hidden names of famous novels from around the world. Find them all. Use the help box.

J	C	R	S	T	R	O	N	G	W	O	M	E	N
Z	J	I	N	N	O	C	E	N	T	D	Z	B	Q
D	C	A	R	A	M	E	L	O	I	T	R	E	O
W	H	I	T	E	T	E	E	T	H	V	T	R	E
V	J	U	T	B	O	R	N	C	R	I	M	E	P
W	E	S	E	A	P	R	A	Y	E	R	P	T	B
R	F	L	T	B	O	E	N	T	D	Z	B	A	H
U	T	B	O	R	F	L	T	B	O	R	N	X	U
T	B	A	A	P	R	A	D	D	Z	B	A	H	M
D	U	S	T	O	R	N	O	D	T	H	V	T	A
D	R	O	B	W	Z	A	T	R	R	O	D	T	N
W	T	P	A	P	A	A	C	Z	X	I	C	A	A
V	T	O	B	O	C	R	Y	R	E	E	F	W	C
W	E	F	R	F	S	X	T	T	W	Z	Y	T	T
R	T	C	P	R	I	A	Z	F	L	T	B	O	S

HELP BOX:

HUMAN ACTS

BORN A CRIME

SEA PRAYER

CARAMELO

INNOCENT

OLD DRIFT

AT WAR

WHITE TEETH

DUST

STRONG WOMEN





Composition



Do you know that the English language that you read today has developed over 1000's of years. Research and write about how this language has developed around the world and become the most spoken language today.

A large, scroll-shaped writing area with horizontal lines for text. The scroll is unrolled, showing a series of horizontal lines for writing. The scroll has a decorative, rounded top and bottom edge. The writing area is enclosed in a dashed border.






Crossword



Solve the crossword below by identifying the authors of the books mentioned below.



Across

- 2. Invisible Man
- 8. Don Quixote

Down

- 1. To kill a Mockingbird
- 3. A Passage to India
- 4. The Great Gatsby
- 5. Beloved
- 6. One Hundred Years of Solitude
- 7. Anna Karenina





Unscramble and complete



Solve the jumbled sentences based on general knowledge facts from around the world.
Rewrite the correct sentences in the space given.

1. country / is / Canada / in / the / second-largest / the / world

2. in / is / round / shape / earth / The

3. in / Africa / is / The / desert / Sahara / situated

4. of / have / different / kinds / around / globe / food / the / cultures / Different

5. The / of / climate / day / a / place / changes / every

6. the / world / is / the / City / in / smallest / Vatican / country

7. Egypt / pyramids / are / in / found / The

8. Rainforest. / South / in / rainforest / tropical / The / situated / world's / Amazon / the / America / largest / is





Composition



Write about the theme of any chapter/book/novel/comic that you've read recently. Write about who wrote it and the country and about the place that the story is set in.

A large, decorative, multi-pointed star-shaped frame (resembling a stylized snowflake or a starburst) is centered on the page. Inside this frame, there are ten horizontal lines for writing, arranged in two groups of five lines each. The lines are evenly spaced and extend across most of the width of the star's body.





Read and fill



Fill the following blanks with the appropriate prepositions.

1. The man went _____ Argentina to play soccer.
2. The birds that migrated from Peru slept _____ the islands in the east coast.
3. We walked _____ the path.
4. We should not talk bad _____ any culture of the world.
5. India is the wheat basket _____ the world.
6. There is a bookstore _____ this city.
7. We ordered a pizza _____ the team.
8. The letter flew _____ the continent to reach you.
9. We get _____ the bus every morning.





Fill and complete



Fill in the blanks with a, an or the.

1. My sister and I went to see _____ Eiffel Tower in France last month
2. We saw _____ leopard in the local zoo yesterday.
3. We will go to see _____ national history museum in Delhi tomorrow.
4. Will you read _____ book, around the world 80 days with me?
5. Her mother saw _____ thief running towards the forest yesterday.
6. Would you tell me _____ story of when you visited Bali?
7. She visited _____ biggest disneyland.
8. Jim and pat Play in _____ American boy band.





Fill and complete



Fill in the blanks with the words given in the help box below.

HELP BOX:

bouquet islands Italy India Mexico Mediterranean German trucks

1. I gave my mother a _____ of French roses.
2. The leaning tower of Pisa is located in _____.
3. Adidas is a _____ shoe company.
4. Panipuri is one of the most famous street foods of _____.
5. The silk route started from Asia till the _____.
6. India and _____ share the similar food palettes.
7. We saw many _____ on the highway.
8. We travelled to the most exotic _____ of Maldives.





Composition



Given below is a passage, read it carefully and answer the following questions.

Australia is an island. It is surrounded by the sea. However, as it is large in size, it is called a continent. It has long sandy beaches, grassy farmland and high mountains. It also has vast deserts and forests.

Australia is famous for sheep rearing. There are millions of sheep all over the country. These sheep are bred for their meat and wool. There are also many large cattle farms in Australia.

Kangaroos live in Australia too. These animals are native to Australia. The mother kangaroo carries her young in her pouch. Kangaroos can run very fast because they have powerful hind legs.

Like kangaroos, koalas can only be found in Australia. These animals are very quiet and they live in gum trees. They seldom climb down from their trees. Koala babies cling onto their mothers' bodies. They also ride on their mothers' back.

1. Why is Australia is called an island?

2. Which animals are native to Australia? Describe them.

3. Which animals are only found in Australia?

4. Describe Australia and what it's famous for?





Choose and tick



Read the following options carefully and tick the correct option.

1. India is the seventh _____ country in the world.
 - a. biggest
 - b. tallest
 - c. populated
 - d. largest

2. Shahrukh Khan is one of the _____ actors in the world.
 - a. most intelligent
 - b. most graceful
 - c. richest
 - d. all of the above

3. River Ganga is a _____ river of the country of India.
 - a. largest
 - b. oldest
 - c. flowing
 - d. sacred

4. China is the most _____ country in the world.
 - a. populated
 - b. advanced
 - c. dangerous
 - d. technologically advanced

5. Air travel is the _____ means to travel the world.
 - a. hectic
 - b. safest
 - c. costly
 - d. cheapest

6. Mount Everest is the _____ mountain on the earth.
 - a. highest
 - b. tallest
 - c. broadest
 - d. smallest





Fill and complete



Answer the following questions using the correct degree of comparison.

1. We _____ to see the Taj Mahal. (go)
2. They _____ the snow show this year. (watch)
3. I _____ to Morocco next year. (travel)
4. His father _____ their business to Dubai soon. (move)
5. They _____ from their house in a couple of weeks. (shift)
6. Students _____ general studies from now on. (study)
7. My mother _____ Switzerland. (explore)
8. His sister _____ singing from next class. (start)





Fill and complete



Complete the following sentences in future tense.

1. Mount Everest is _____ (big) than any other mountain on earth.
2. Rolls Royce is one of the _____ (luxurious) cars in the world.
3. Indian currency is _____ (cheap) than US dollars.
4. Delhi is the _____ (polluted) city in the world.
5. The royal house of England is one of the _____ (famous) royal family in the world.
6. Japanese sushi is _____ (popular) among teenagers.
7. French desserts are the _____ (taste) deserts in the world.
8. Usain bolt is the _____ (fast) runner in the world.





Identify and complete



Add ?, ! and . punctuation marks wherever needed.

1. Will you be leaving for London tomorrow
2. Kyle loves to cook pasta
3. Does Amy travel around New Zealand and Australia too
4. Your mother loves French cuisine
5. My aunt is from the United Arab Emirates
6. Will you go to Fiji with your parents
7. We are excited to visit grandma in Jamaica
8. Travelling by plane is easy





Complete the sentence



Write down the synonym and antonym of the words in bold in each sentence. Rewrite the given sentences.

1. Jimmy **likes** to play cricket. (synonym)

2. Carol feels **sad** to leave her from her hometown. (antonym)

3. Sharon loves to go hiking in the **forest**. (synonym)

4. **Everyone** enjoys watch the Korean pop music. (antonym)

5. The president of United States is said to be **responsible** with his power. (antonym)

6. Coronavirus is a very **dangerous** virus. (synonym)

7. Travelling by plane is very **inconvenient** for some people. (antonym)

8. Charlie **doesn't like** to watch French movies. (antonym)





Fill and complete



Write the correct forms of verbs in the blanks from the options given in the brackets.

1. They _____ (go) to Dubai last month.
2. They had already _____ (arrive) when we _____ (reach) the airport.
3. Maggie has _____ (bring) a croissant.
4. I have _____ (completed) travelling to the Northeastern states of India.
5. They have _____ (see) the movie.
6. He has _____ (find) a very beautiful restaurant in the streets of Italy.
7. We have _____ (arrive) in Peru.
8. They _____ (write) him a postcard from New York.





Choose and fill



Choose the correct conjunction from the brackets.

1. It started to rain _____, I put on my raincoat. (so, but)
2. Climate change is irreversible _____ it is our duty to help save the planet. (but, and)
3. Would you like to walk _____ take a bus? (or, and)
4. The referee blew the whistle _____ the match was over. (because, so)
5. Nicole doesn't enjoy studying world history _____, she always scores well. (yet, but)
6. This summer you can either go to camp _____ visit your grandmother in India. (or, and)
7. We flew to New York during Christmas _____ we missed being home. (but, because)
8. His parents know where he was going _____ he went somewhere else. (yet, but)





Identify and circle



Circle the predicate from the given sentences below.

1. He studied for his test all night but slept through the test.
2. She travels for work and stays in every destination for a week.
3. We went to Rome and explored the city.
4. He made gifts for his friends and delivered them to their houses.
5. She is sitting on the roof watching birds fly.
6. Dorothy and Martha said goodbye to their friends and went home.
7. She is crying because she misses her parents.
8. Do you want to eat pasta or a burger?





Identify and write



Write the name of the correct location/place that the following monuments are situated in.






















Match



Let's see if you can match the following dance forms with the correct nation that they originate from.

Ballet

China

Bollywood

Argentina

Salsa

Brazil

Dragon dance

India

Samba

Cuba

Tango

Russia





Fill and complete



Fill in the following blanks with the correct answer.

1. The _____ river is the longest river in the world, it is situated in Africa.
2. A book comprising of maps is called an _____.
3. The Antarctic Ocean is also called _____.
4. _____ are known as very large water bodies.
5. There are _____ continents in the world.
6. _____ is the largest country in the world.
7. The _____ direction is always on the top of the map.
8. A small model of earth is called _____.





Fill and complete



Look at the pictures of various sports given here. These sports are the national sports of various countries around the world. Write the names of the countries below the pictures given.



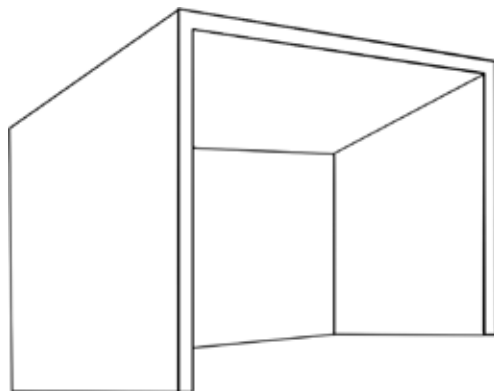
















Fill and complete



Fill in the following blanks with the correct answer. Use the help box to complete each sentence.

HELP BOX:

Egypt, tropical, colder, third, Vatican City,
hydroelectricity or hydropower, Asia, blue

1. _____ is the smallest country in the world.
2. The largest continent of the world is _____.
3. Earth is the _____ planet from the sun.
4. The Amazon rainforest situated in South America is the world's largest _____ rainforest.
5. Energy made from flowing water is called _____.
6. Water bodies on a map are always indicated in _____ color blue.
7. The pyramids are found in _____.
8. Places higher than sea level have a _____ climate.





Wordsearch



There are 10 hidden names related to forests, mountains, and lakes around the world in the word grid, can you find them all? Use the help box.

HELP BOX:

Everest, Sundarbans, Godavari, Olympus, Amazon, Ganges, Loktak, Nile, Alps, Gir

F	N	U	N	W	N	E	V	E	R	E	S	T	Y
D	Q	N	S	U	N	D	A	R	B	A	N	S	M
C	G	O	D	A	V	A	R	I	P	S	G	Z	B
X	C	E	R	X	V	T	Y	U	I	O	F	G	T
Y	T	C	L	G	U	A	O	L	Y	M	P	U	S
Z	R	R	H	Y	I	K	M	G	O	O	B	E	O
I	G	A	N	G	E	S	T	A	H	W	D	H	T
J	I	T	R	E	E	R	U	Y	Z	L	I	Y	R
L	O	K	T	A	K	A	T	Y	T	O	L	P	N
B	T	U	O	G	Y	R	E	V	F	H	N	K	L
A	J	Y	N	I	L	E	C	G	L	C	P	T	R
F	E	T	E	R	C	G	B	N	A	L	P	M	B
X	D	F	E	R	W	Y	A	L	P	S	I	O	B





Choose and color



Choose and color the correct answer from the options in the sentences given here.

1. Canada is the seventh largest country in the world.

True

False

2. The earth is round in shape.

True

False

3. The Sahara Desert is situated in India.

True

False

4. Different cultures around the globe have different kinds of food.

True

False

5. The largest ocean in the world is the Pacific Ocean.

True

False

6. The Antarctic Ocean is also called the Southern Ocean.

True

False

7. The climate of a place changes every day.

True


False

8. There are four oceans and twelve continents.

True

False





Match



Let's see if you can match the following dance forms with the correct nation that they originate from.

Kabuki

United States

Belly dance

Spain

Contemporary dance

Egypt

Viennese waltz

Japanese

The raqs sharqi

Austria

Flamenco

Middle East





Choose and color



Choose and color the correct answer from the options given in the sentences here.

1. The earth revolves on its axis.

True

False

2. There are eleven wonders in the world.

True

False

3. Large water bodies are called oceans.

True

False

4. Taj Mahal is one of the wonders of the world.

True

False

5. Highly stylish form of writing is known as calligraphy.

True

False

6. The lion is the national animal of Kenya.

True

False

7. The Congo rainforest in Africa is the biggest rainforest in the world.

True


False

8. The rule of the Tang Dynasty is also known as the Golden Age.

True

False





Unscramble and write



Below given are the photos of various world leaders and their names scrambled.
Unscramble the words and write the names correctly.



DISVGÍ DÓTOGANBFNTIIR



NAERDNRA ODIM



NRMIA NKAH



IX NNPGIJI



OYATL RSINGHTE



OJE IDDEBN



OLAGD IEMR





Read and match



Match the following columns. Color the sentences in the first column and the answer in the second column with the same color to match them.

In which country are white elephants found?

Atlantic

Most populated country in the world

Switzerland

Biggest island of the world

Thailand

Queen Elizabeth is the queen of

Greenland

The Bermuda Triangle is located in

The Britishers

Mona Lisa was painted by

China

India gained independence by overthrowing

United Kingdom

Which country is known as the playground of Europe

Leonardo da Vinci





Identify and match



Each country has its own national animal. Identify and match the correct animal to the nation of which they are the national animal of.



BHUTAN



COLUMBIA



INDIA



UNITED KINGDOM



CHINA



FRANCE



UNITES STATES OF AMERICA





Read and match



Match the following columns. Color the sentences in the first column and the answer in the second column with the same color to match them.

Tallest mountain

France

Country with dollar as its currency

India

Louvre Museum

Everest

Taj Mahal

United Kingdom

Hottest continent

United States of America

Seventh largest country of the world

Agra, India


Buckingham Palace

Antarctica

Coldest continent

Africa





Wordsearch



Find the different types/forms of governments that exists all around the world from the word grid given here. Use the help box.

HELP BOX:

Tyranny, Theocracy, Oligarchy, Totalitarian, Communism, Federation, Monarchy, Anarchy, Democracy

T	H	E	O	C	R	A	C	Y	G	N	Q	K	K
U	C	O	M	M	U	N	I	S	M	M	T	H	T
T	F	I	O	L	I	G	A	R	C	H	Y	S	O
H	F	Z	E	P	N	N	N	H	M	I	N	U	T
E	T	E	K	M	C	C	G	B	D	S	E	J	A
O	D	E	D	L	M	D	A	Y	A	Q	C	T	L
C	H	E	S	E	M	O	N	A	R	C	H	Y	I
R	S	Y	M	A	R	V	W	B	N	K	C	R	T
A	G	F	Q	O	N	A	H	Q	R	C	W	A	A
C	S	U	V	G	C	A	T	Y	X	H	H	N	R
Y	E	C	J	D	O	R	R	I	A	J	O	N	I
H	V	X	E	G	G	N	A	C	O	L	X	Y	A
C	Z	T	G	R	J	L	E	C	H	N	G	C	N
F	V	V	P	N	N	Z	S	H	Y	Y	W	G	S





Fill and complete



Let's see how much you know about the food you eat. Write the originating country of the following dishes mentioned below.

1. Sushi _____

2. Fish and chips _____

3. Pasta _____

4. Hamburgers _____

5. Nachos _____

6. Masala dosa _____

7. Paella _____

8. Croissants _____






Crossword



Complete the crossword with the hints given below.



Across

- 2. Currency of Europe
- 4. Currency of China
- 5. Currency of UAE
- 9. Currency of Kenya
- 10. Currency of Algeria

Down

- 1. Currency of UK
- 3. Currency of Yemen
- 6. Currency of India
- 7. Currency of America
- 8. Currency of Japan





Think and write



What according to you are the values that we learn from different festivals seen in the pictures below. Write your answer in one sentence.




















Identify and write



Flags are so creative and unique, they are the identity of a nation and it is like a signature of a nation. Let's see how much you know about flags and countries. Identify the countries of which the flags are given below.













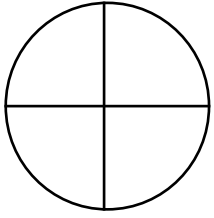




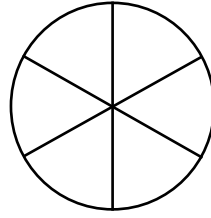
Color



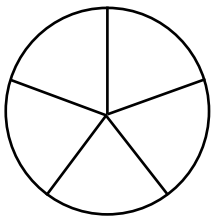
Color in the diagrams as per the fraction given.



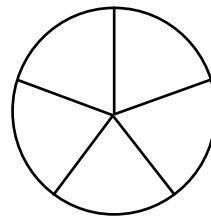
Color $\frac{1}{4}$



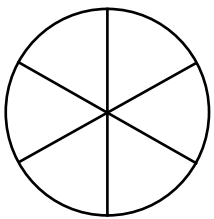
Color $\frac{4}{6}$



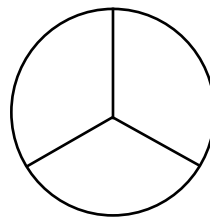
Color $\frac{3}{5}$



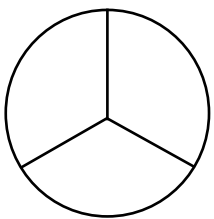
Color $\frac{2}{5}$



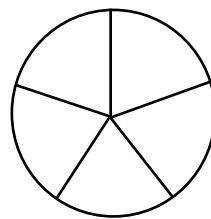
Color $\frac{2}{6}$



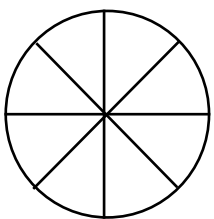
Color $\frac{1}{3}$



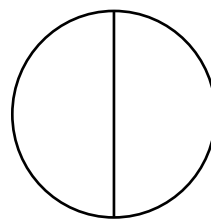
Color $\frac{2}{3}$



Color $\frac{4}{5}$



Color $\frac{2}{8}$



Color $\frac{1}{2}$









Count and write



Count how many squares tall each picture is, then write the number in the box.


5		
4		
3		
2		
1		
5		
4		
3		
2		
1		
5		
4		
3		
2		
1		
5		
4		
3		
2		
1		



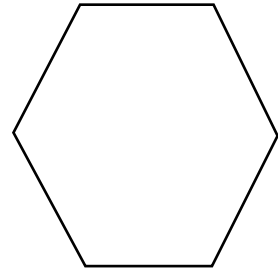
Do as directed



1. Split the shape into 6 equal parts and label each part as a fraction of the whole.



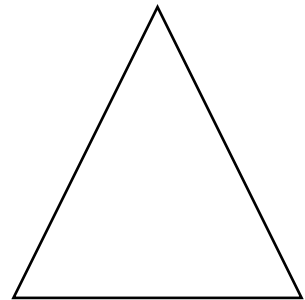
2. Split the shape into 4 equal parts and label each part as a fraction of the whole.



3. Split the shape into 8 equal parts and label each part as a fraction of the whole.



4. Split the shape into 2 equal parts and label each part as a fraction of the whole.







Read and Write





Read the clocks and write the time in the spaces given below each clock
















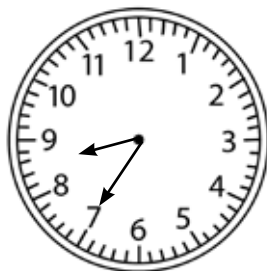



























Add and color



Add the equations in the fishes. Color in the fishes based on their equation answer, matching the color as per the color code given in the box below.

66: purple 72: black 44: blue 80: yellow
92: red 93: brown 91: orange 35: green





Count and color




Color all the triangles green. How many triangles are there? _____

Color all the squares red. How many squares are there? _____

Color all the rectangles blue. How many rectangles are there? _____

Color all the circles brown. How many circles are there? _____

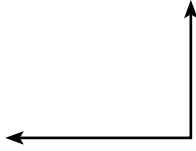


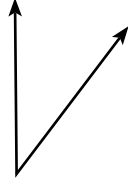


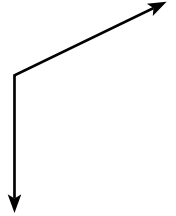
Identify and write

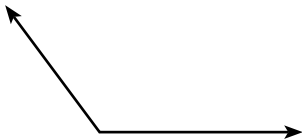



Identify the angles and write their names.

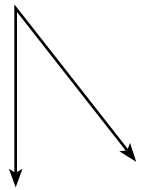


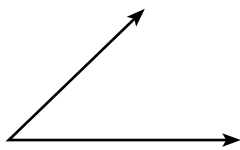


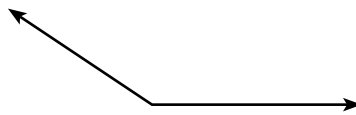


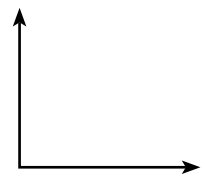
















Wordsearch



Multiply the numbers given in the hint box. Find the answer number names in the wordsearch.

T	S	F	E	O	F	C	V	N	A	B	B
W	I	O	V	W	I	X	G	E	J	I	M
E	X	R	I	T	F	J	J	V	L	C	R
N	T	T	F	Y	T	V	H	E	W	L	U
T	Y	Y	Y	T	Y	G	W	S	V	W	O
Y	T	N	T	R	S	N	C	Y	N	U	F
E	H	I	R	O	I	W	Q	T	L	U	F
I	R	N	I	F	X	N	R	N	A	D	H
G	E	E	H	L	Z	P	E	E	X	R	T
H	E	S	T	Y	T	N	E	V	E	S	G
T	W	E	N	T	Y	O	N	E	E	J	I
N	E	E	T	R	U	O	F	S	E	S	E

HELP BOX:

1×7

5×7

9×7

2×7

6×7

10×7

3×7

7×7

11×7

4×7

8×7

12×7

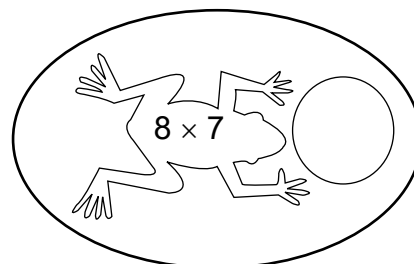
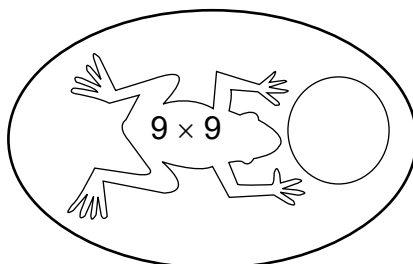
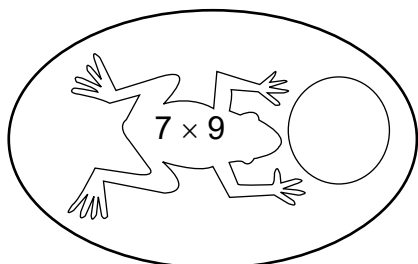
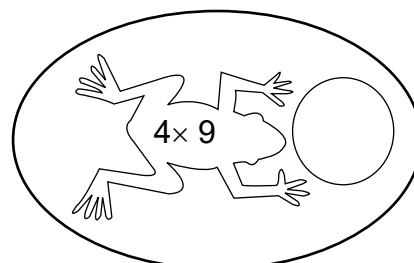
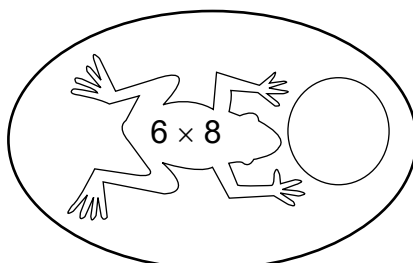
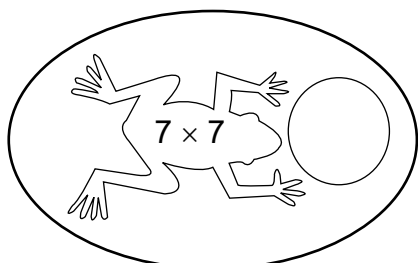
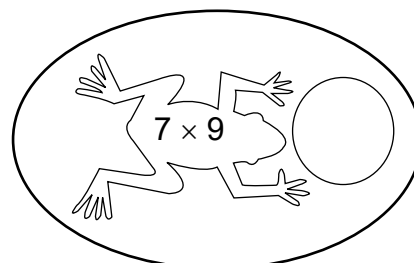
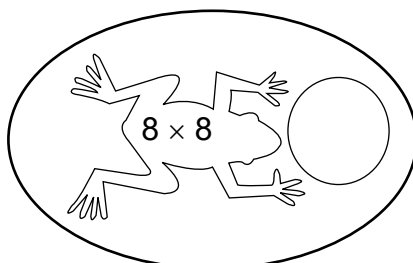
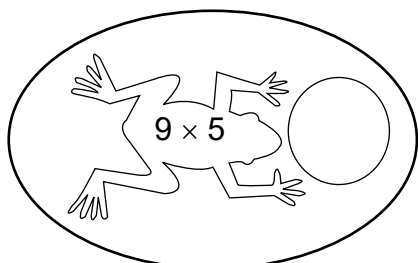
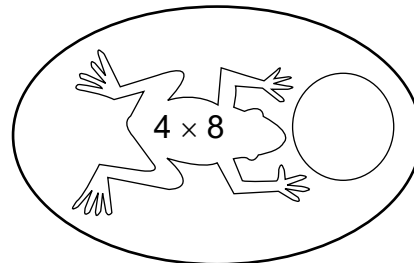
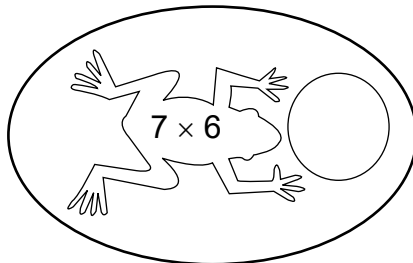
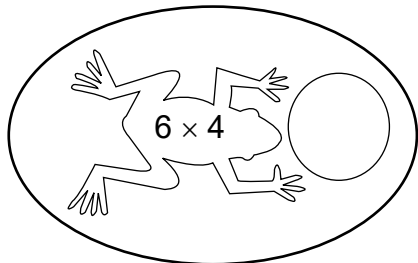




Answer and color



Write the answers to these multiplication equations in the bubbles. Shade the odd bubbles green and the even bubbles yellow.





Crossword



Add and complete the given crossword.

4	×	2	=				+	3	=	8
				+						
	+	0	=	1		4	+	0	=	
				=						
				7	+		=			
1					+					
+					+					
					4	+		=	9	
=					=					
3	+		=	6	2	=		=	8	
				+						
				4	+		=		3	
				=						
6	+		=	7		+	4	=		
				+						
				1						
				=						
				+						
				2						
				=						
				+						
				=						





Solve and complete




Read the different word problems and solve these in the box given below.

There are 700 sweets in the 4 bottles. Each bottle contains the same number of sweets. How many sweets are there in 3 bottles?



The picture below shows the weight of 5 oranges which are all of same weight. What is the weight of 3 oranges in grams?



If the price of 2 pens are ₹ 4.80, what is the price of 7 pens?





Match and Color



Each piece of popcorn has a number equivalent to the number on either tub A or B. Color the ones matching Tub A yellow and the ones matching Tub B pink.

$9999 + 1$

100
hundreds

Successor of
9999

Smallest 5
digit number

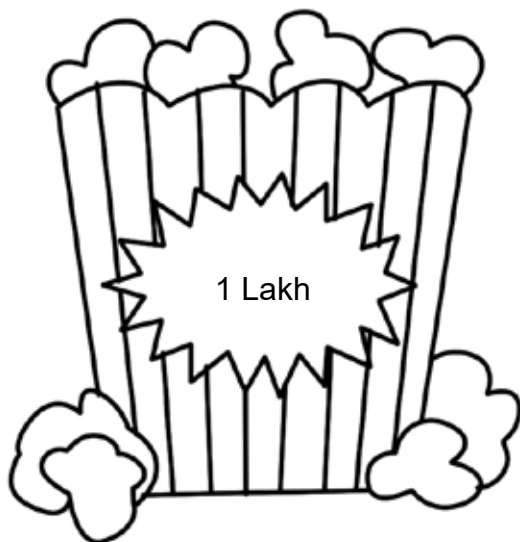
Successor
of 9999

$99999 + 1$


100
thousands

10,000

1,00,000



A



B

Smallest 6
digit number















Count and Write



Count the following things found in an aquarium and write the correct number in the given box below



	<input type="text"/>		<input type="text"/>
	<input type="text"/>		<input type="text"/>
	<input type="text"/>		<input type="text"/>
	<input type="text"/>		
	<input type="text"/>		<input type="text"/>



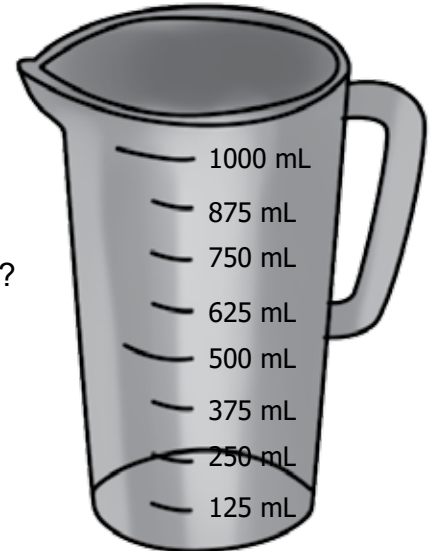
Solve and answer



Look at the jug on the right and answer the following questions.

I need to measure out 1 litre of milk for my milk tart. How many millilitres will I need?

I have a 2 litre bottles of milk, will I be able to pour it all into the jug?



Look at the bottles below and put them in order from the one that can hold the least amount of liquid to the container that can hold the most amount of liquid.



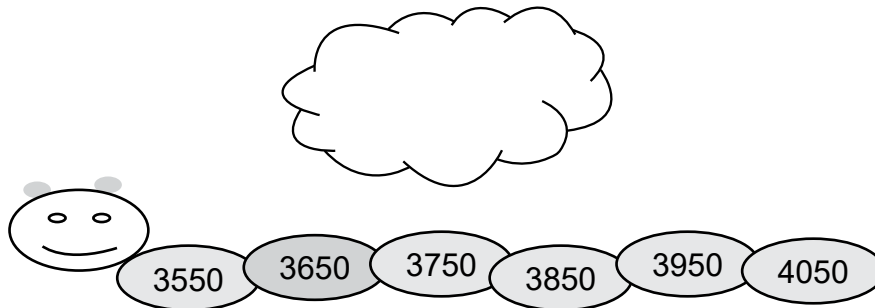


Identify and write

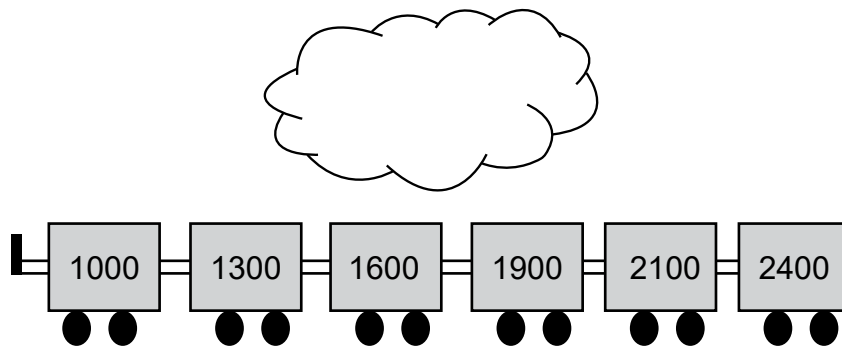


Identify the skip count pattern of the following number lines.

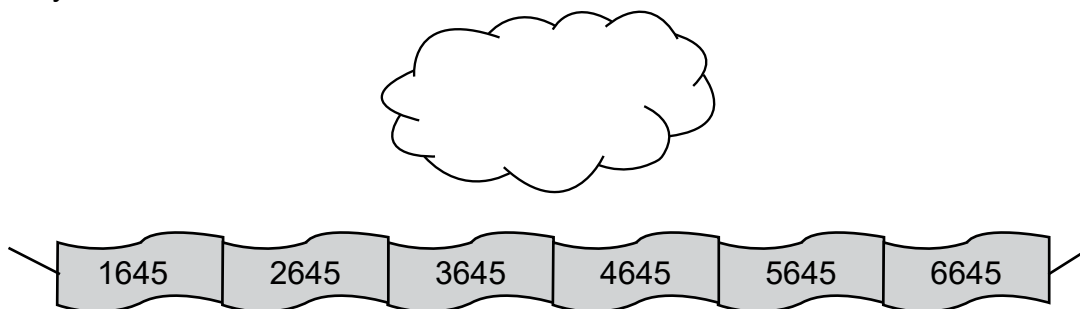
Skip count by



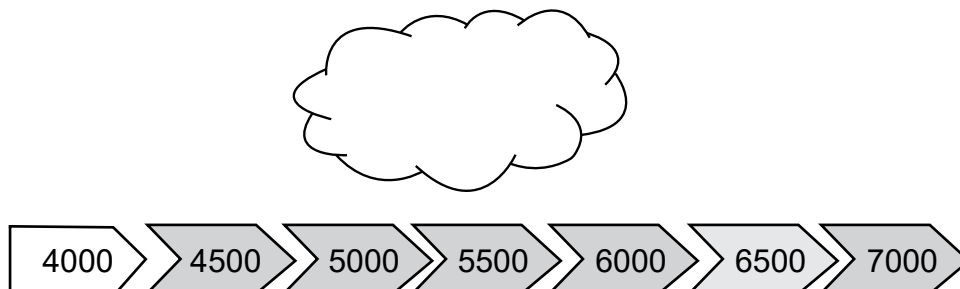
Skip count by



Skip count by



Skip count by





Arrange



Arrange the following blocks of numbers in ascending order:

33441, 81290, 93431, 12255, 56432, 61121, 10023, 12000, 87000, 66666

10023

Arrange the following blocks of numbers in descending order:

90076, 61212, 74333, 5610, 56430, 91176, 22150, 30309, 41188, 19191, 90011

91176



Identify and Circle



Which from the following three statements below is a lie? Circle the correct statements and cross the wrong statement.

(1)

Hundreds	Tens	Ones

479

(2)

Hundreds	Tens	Ones

111

(3)

Hundreds	Tens	Ones

525



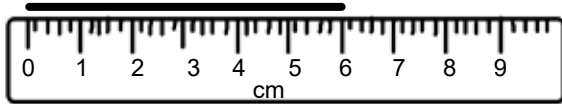


Reading scales metric

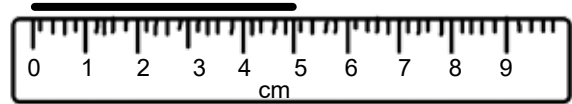


Use your knowledge of fraction and the number system to work out these measurements. Remember to write down the units of measurement.

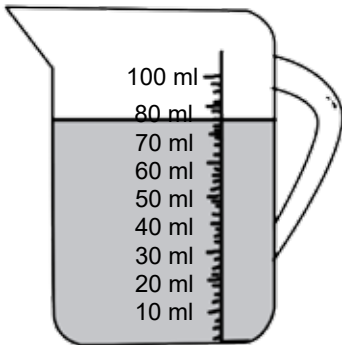
1. How long? _____



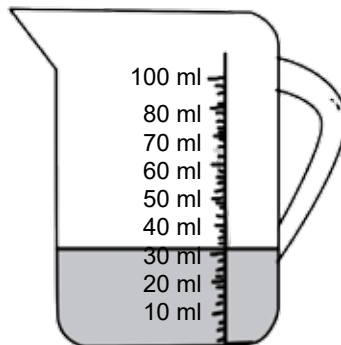
2. How long? _____



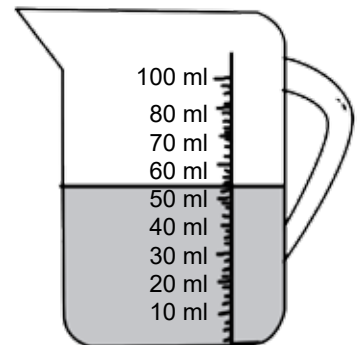
3. How much? _____



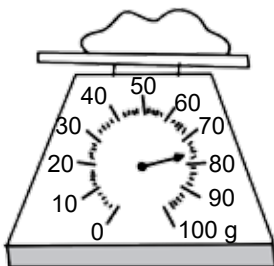
4. How much? _____



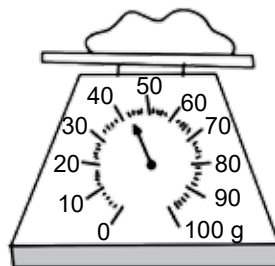
5. How much? _____



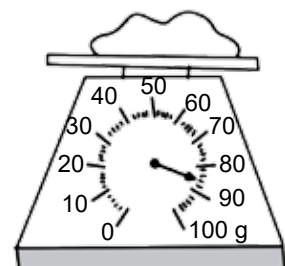
8. How heavy? _____



9. How heavy? _____



10. How heavy? _____






Choose and circle



Cookie Jar

I have 9 cookies in my cookie jar.
There are 6 chocolate chip cookies and 3
peanut butter cookies.

Circle the best answer to each
question.



1. What is the probability of picking a peanut butter cookie?
 - a. Likely
 - b. Unlikely
 - c. Certain impossible
2. What is the probability of picking up an oatmeal cookie?
 - a. Likely
 - b. Unlikely
 - c. Certain impossible
3. What is the probability of picking up chocolate chip cookie?
 - a. Likely
 - b. Unlikely
 - c. Certain impossible
4. What cookie are you least likely to pick?
 - a. Chocolate chip
 - b. Peanut butter
5. Which cookie are you most likely to pick?
 - a. Chocolate chip
 - b. Peanut butter





Wordsearch



Can you find the measurement vocabulary words hidden in this word search puzzle? Use the help box.

A	T	E	W	E	S	T	I	M	A	T	E	X	T	W
E	L	B	C	C	V	A	Z	T	V	B	U	E	R	D
W	R	O	E	A	R	E	A	I	T	R	E	B	D	E
O	T	R	N	B	E	W	S	Z	I	N	C	H	Z	P
Z	S	F	T	G	R	T	A	B	O	U	T	S	U	T
V	H	E	I	G	H	T	S	E	R	W	I	D	T	H
S	W	T	M	I	T	R	E	X	E	W	R	T	Q	E
C	Q	E	E	R	I	U	T	A	C	T	U	A	L	X
A	P	K	T	A	L	L	O	C	O	S	Y	T	R	S
P	P	T	E	P	O	R	T	T	I	T	H	V	P	U
A	C	T	R	U	L	E	R	L	A	L	M	O	S	T
C	P	T	I	T	R	E	V	Y	P	U	T	L	R	O
I	P	L	E	N	G	T	H	P	U	T	R	U	A	T
T	F	O	O	T	A	T	F	S	G	F	S	M	P	Y
Y	P	Y	T	X	G	M	E	A	S	U	R	E	S	A

HELP BOX:

CENTIMETER	LONG	EXACTLY	CAPACITY	LENGTH
INCH	SHORT	MEASURE	VOLUME	WIDTH
HEIGHT	ALMOST	TALL	ABOUT	RULER
ESTIMATE	DEPTH	AREA	FOOT	ACTUAL





Choose and color



Select and color the correct answer from the options given below.

1. Identify the animal that sleeps throughout the summer. _____

- a. Snail b. Deer c. Rabbit d. Frog



2. Pick the parasite that lives on the host's body. _____

- a. Cockroach b. Lice c. Tapeworm d. Roundworm



3. _____ can live on both land and water.

- a. Fish b. Frog c. Snail d. Octopus



4. Sheep and camel are _____ animals.

- a. omnivore b. wild c. herbivore d. aerial



5. Birds are an example of _____ animals.

- a. domestic b. amphibians c. aerial d. aquatic



6. the long winter sleep of animals is known as _____

- a. moulting b. aestivation c. hooves d. hibernation



7. Whales and turtles have _____ that help them swim.

- a. moulting b. wings c. flippers d. fins






Identify and circle



Different animals use different parts of their body to move around. Circle the body part that helps each of these animals move around.





Fill and complete



Complete the sentences using the words from the help box.

1. Birds use their _____ to fly.
2. Sharks use their _____ to swim.
3. Cats use their _____ to climb trees.
4. Frogs use their _____ to jump.
5. Babies use their _____ to crawl.

HELP BOX:

wings

fins

hind legs

claws

hands and knees





Choose and color



Choose and color the correct answer from the options given here.

1. Big and tall plants are called trees.

True

False

2. The stem is not a part of the plant.

True

False

3. All plants will always have fruits.

True

False

4. The leaf is the part of the plant that makes food.

True

False

5. Roots take in water from the soil.

True

False

6. The fruit is not a part of the plant.

True

False

7. Watermelon is a fruit that has many seeds.

True

False

8. All fruits do not contain seeds.

True

False

9. A root grows into a new plant.

True

False





Identify and write



Read the sentences given below and give examples of each.

1. Two vegetables which can be eaten raw.

_____, _____

2. Name any two dry fruits.

_____, _____

3. Name any two fruits that are used to make juice.

_____, _____

4. Name any two vegetables that are green in color.

_____, _____

5. Name any two fruits that have many seeds.

_____, _____

6. Name any two useful things that we get from plants.

_____, _____

7. Name any two cereals that you eat.

_____, _____

8. Name any two food items that are your favourite.

_____, _____





Match



Match the following:



Mint



Rose



Basil



Banyan



Mango



Tulsi



Hibiscus





Fill and complete



Fill in the words from the help box to complete the sentences given below.

HELP BOX:

large intestine, oesophagus, anus, liver, digestive system,
mouth, saliva, small intestine

1. The _____ breaks down the food we eat.
2. Digestions begins in the _____ when you chew and swallow.
3. A watery liquid called _____ makes the food wet and soft, and it has a chemical that helps digest the food.
4. The _____ connects the bottom of your throat to your stomach.
5. The _____ is a long narrow tube that has spongy walls that soak up nutrients from food.
6. The _____ is on the right side of the body near the lowest rib. Its job is to clean the blood.





Wordsearch



Find eight words related to plants in the word grid given below.

U	S	T	E	E	V	E	R	F	S	T	Y
N	S	U	N	D	A	R	B	L	N	S	M
O	L	E	A	F	R	I	P	O	G	Z	B
E	R	X	V	T	Y	U	I	W	F	G	T
C	L	G	R	A	O	L	Y	E	P	T	S
R	H	Y	I	O	M	G	O	R	B	R	O
A	N	G	E	S	O	A	H	W	D	E	B
T	R	F	E	R	U	T	Z	L	I	E	R
K	F	R	U	I	T	Y	T	O	L	P	A
U	O	U	Y	R	E	V	F	H	N	K	N
Y	N	I	L	E	S	T	E	M	P	T	C
T	E	R	C	G	B	N	A	L	P	M	H
F	S	E	E	D	A	L	P	S	I	O	B





Cut and paste



All the animals live in unique homes. These homes have names. Cut out the names from below and paste them below the correct picture.



mouse hole

den

hutch

sheep pen

anthill

beehive

tree hollow

cave





Unscramble



Unscramble and form the word related to outer space.

snu

momo

poult

raunts

saurun


crumyer

suven

unpeent

tipujuer





Wordsearch



All living things need food to grow. Plants make their own food by using the raw materials. Search four names of raw materials used by plants from the word grid given below.

A	L	E	A	H	I	D	J	S	E	G	G
X	O	G	I	O	H	C	S	O	L	M	V
D	V	B	R	S	U	N	L	I	G	H	T
G	E	O	H	C	X	Y	S	L	V	I	L
Q	W	A	T	E	R	L	M	I	L	K	G

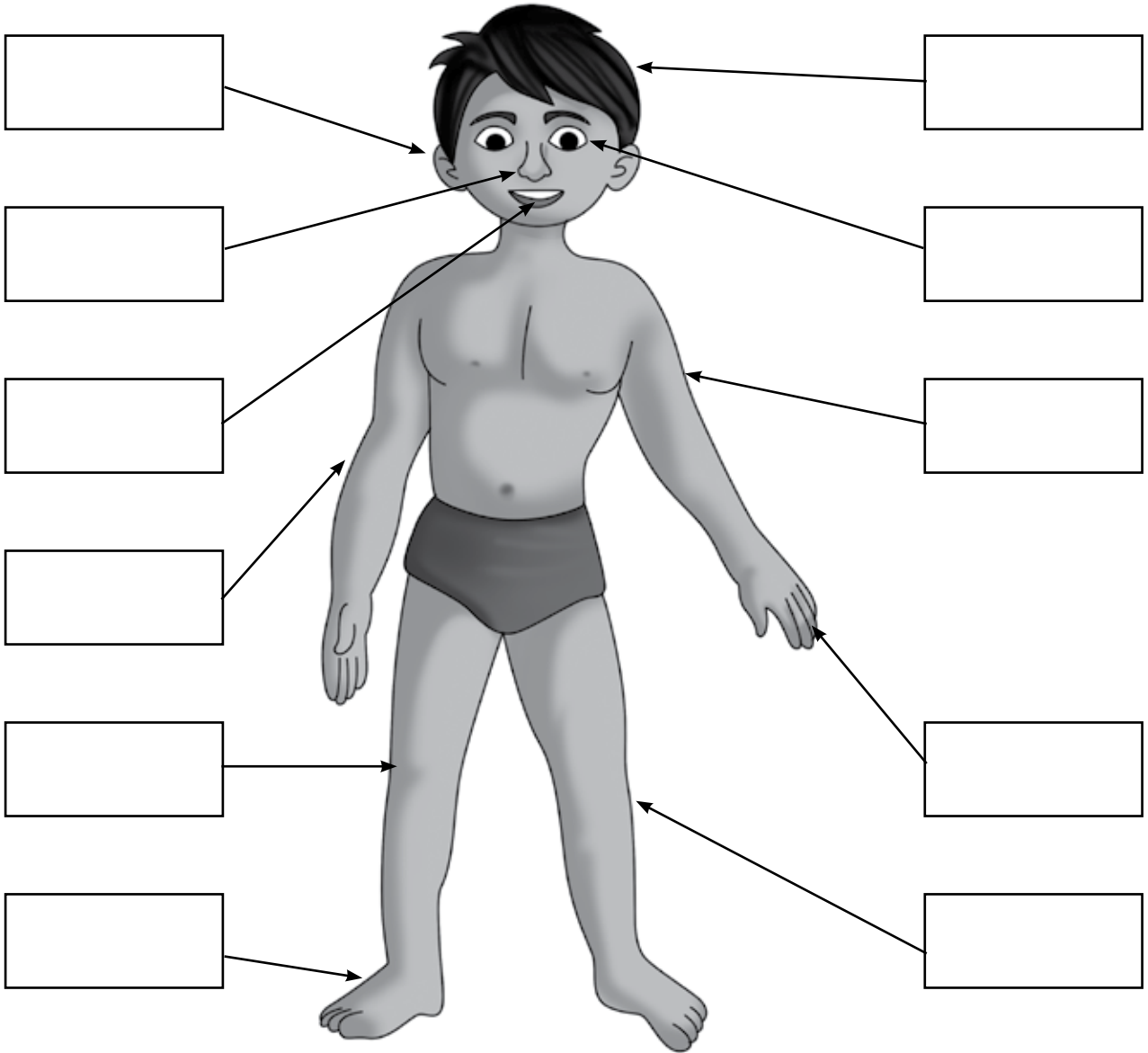




Cut and paste



Look at the below picture given. Cut and paste from the help box at the bottom of the page and label the different parts of the body.



hair

eye

leg

arm

nose

mouth

hand

ear

knee

elbow

foot





Match



Draw lines and match the following.



Shrub



Climber



Tree



Creeper



Herb





Fill and complete

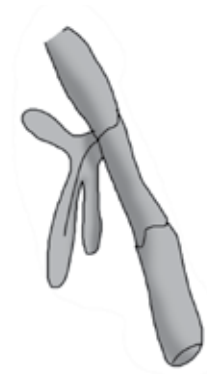


Write the missing letters.

R _ _ _ t



St _ _ m



Le _ _ _



F _ _ _ it





Identify and tick

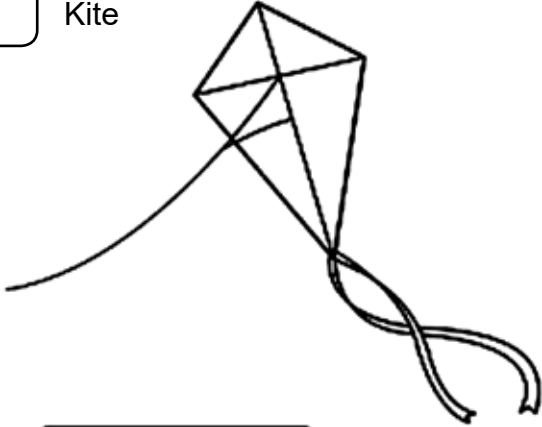


Do as directed

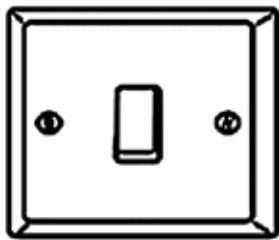
[✓] For push

[x] For pull

Kite



Bike




Switch


Anchor



Plane

Toy





Wordsearch



We can see the different shapes of the moon in the sky. These various phases of the moon have specific names. Find the seven moon phases in the wordsearch. You can refer to the help box.

Moon Phases

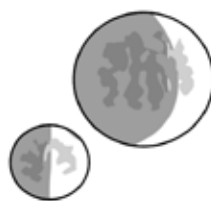
Q	L	X	W	T	H	I	R	D	Q	U	A	R	T	E	R	S	B
Z	P	B	X	W	A	X	I	N	G	G	I	B	B	O	U	S	B
W	A	X	I	N	G	C	R	E	S	C	E	N	T	R	I	B	V
W	A	N	I	N	G	C	R	E	S	C	E	N	T	T	F	O	N
J	X	G	V	A	O	I	O	H	T	N	A	R	W	M	U	L	E
Y	Q	B	U	A	T	Z	M	I	F	E	Y	K	S	Z	L	C	W
M	A	J	B	F	I	H	I	M	K	W	I	J	B	Z	L	Y	M
U	R	U	A	M	L	K	M	R	J	M	U	S	J	C	M	R	O
I	I	F	Y	O	I	S	U	I	G	O	F	U	B	I	O	Q	O
W	A	N	I	N	G	G	I	B	B	O	U	S	T	V	O	D	N
U	C	M	I	V	V	G	I	G	O	N	T	B	K	W	N	B	T
F	I	R	S	T	Q	U	A	R	T	E	R	X	B	Y	T	M	J

First Quarter

Waxing
Gibbous



Waxing
Crescent



Full
Moon

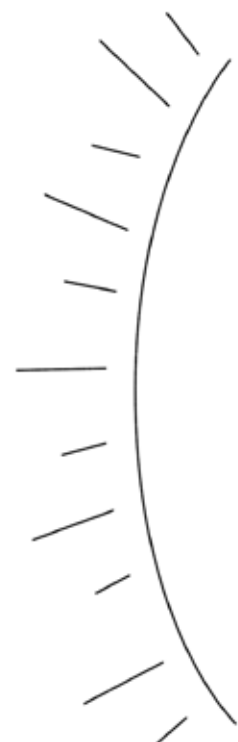


New
Moon

Waning
Gibbous



Waning
Crescent





Match



Match the following animals to the homes they live in.



Hippopotamus



Elephant



Alligator




Zebra



Bear




Cave




Grasslands



Forest



Marshes



Lake





Match



Draw a line that matches each sense with the correct picture.

Sight



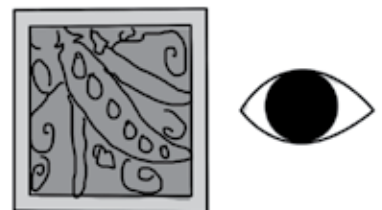
Smell



Taste



Touch



Hearing





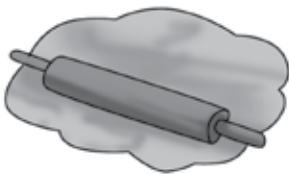
Identify and write



Label the different types of friction. Use the help box given. The words can be repeated.

HELP BOX:

sliding friction, rolling friction, static friction, fluid friction





Identify and fill



Name the type of consumer (herbivore, carnivore or omnivore) each animal is. Write it in the space provided below.

1. lion



2. squirrel



3. deer



4. coyote



5. cow



6. brown bear



7. rabbit



8. raccoon



9. giraffe







Think and write



Think about what force each machine uses to get a job done. For each machine, write push or pull.

























Do as directed



Read the sentences given below. Do as instructed.

1. Circle the pleasant smell.



2. Cross the unpleasant smell.



Match the following foods to the tastes.

Sweet



Salty



Sour



Spicy



Bitter





Identify and write



Below given are the pictures of different inventors along with their names. These are the creators of various components of computers-, identify them and write the names of the components they created.

HELP BOX:

Doug Engelbar Karl Ferdinand Braun James Russell
Christopher Latham Sholes Ernst Siemens





Crossword



Fill in the following crossword with the creators of social networking platforms along with the name of these people, using the hints given below.

1						2					

Across:

- 1. Steve Huffman
- 3. Mark Zuckerberg
- 5. Jack Dorsey
- 7. YouTube
- 8. Evan Spiegel
- 9. Bradley Horowitz
- 10. Janus Friis

Down:

- 2. David Karp
- 4. Instagram
- 6. Brian Acton





Composition



The invention of computers has revolutionized how we do our day-to-day work. Write a few lines about how the usage of computers differs from place-to-place.

A large writing area shaped like a scroll, with a grey shaded top-left corner and a grey shaded bottom-left corner. The scroll is unrolled, revealing a series of horizontal lines for writing.





Fill and complete



Fill in the blanks.

1. Using internet and email you can communicate from _____ around the world.
2. Internet is a software that was created by _____ from _____
3. CTRL+C is the short cut key to _____
4. The hard disc was created by the company _____
5. The inventor of QWERTY keyboard layout was _____
6. The first operating system ever created was _____
7. Back up is used in a computer to _____.
8. CTRL+ A is used to _____.

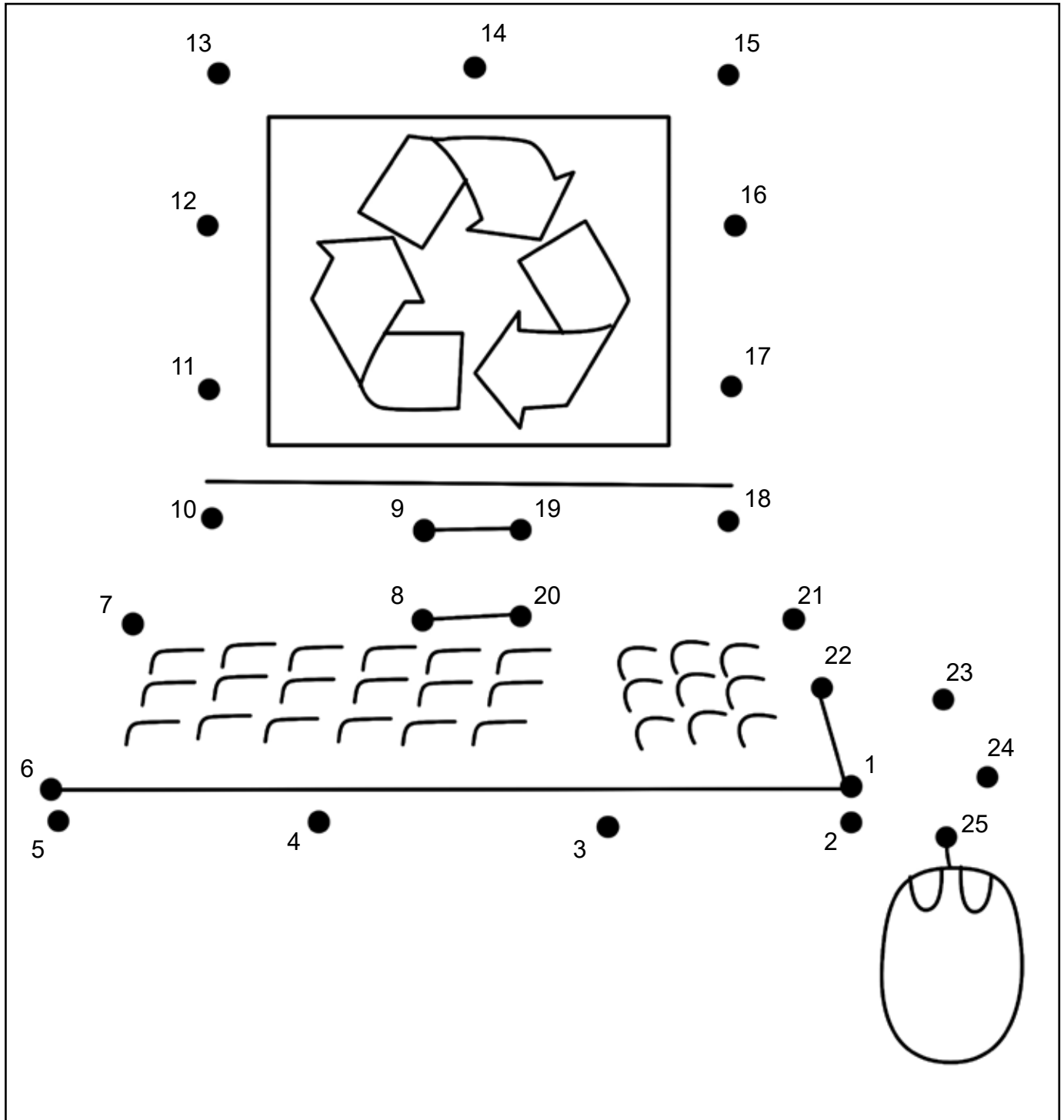




Join and color



We all know that after the pandemic of Coronavirus pandemic the world greatly shifted towards video conferencing for communication. Everyone now is using video conferencing. Complete the image by joining the dots below and color it.






Composition



Write about 5 guidelines that one should follow while video conferencing.

A large writing area with a scroll-like top and bottom edge and horizontal lines for text.






Crossword



Solve the crossword about computer and technology-based companies and their owners.



Across:

- 2. Steve Jobs
- 3. Lee Byung-chul
- 6. Rahul Sharma
- 8. Elon Musk

Down:

- 1. David Packard
- 4. Jensen Huang
- 5. Narendra Bansal
- 7. Tony Chen





Identify and write



Write true or false for the following statements.

1. PowerPoint is an application of multimedia. _____

2. Normal view is the default view in the PowerPoint _____

3. Slide show view is meant for the full screen view of a slide. _____

4. Templates are the pre-defined styles or designs which are present in the system. _____


5. Placeholders cannot hold objects such as text, clip art, etc. _____

6. Range is the largest unit of a worksheet. _____

7. Three types of data can be entered in MS. Excel software. _____

8. Ctrl + S is the short cut key to copy a document. _____





Wordsearch



Find the names of 10 different software from the word grid that are used all around the world. Use the help box.

HELP BOX:

MSWORD MSACCESS MSPOWERPOINT WORDPAD

MSEXCEL NOTEBOOK TURBOC DEVICEMANAGER MYCOMPUTER

D	C	K	K	F	L	M	M	Y	O	A	N	Y	W
E	U	Q	L	M	V	R	S	H	O	F	P	T	N
V	A	L	W	Y	M	W	C	A	J	S	W	T	Y
I	E	J	O	C	S	I	Y	B	C	W	U	D	E
C	P	X	R	O	P	Y	P	J	I	C	G	R	Z
E	T	T	D	M	O	Q	Z	T	C	H	E	P	O
M	U	K	P	P	W	N	J	S	M	N	C	S	S
A	R	M	A	U	E	E	P	I	S	Q	J	L	S
N	B	S	D	T	R	T	Y	X	W	I	E	V	D
A	O	E	V	E	P	B	I	P	O	G	L	Y	J
G	C	X	B	R	O	E	U	I	R	R	Y	Z	T
E	I	C	T	Z	I	A	D	K	D	M	U	F	U
R	C	E	G	W	N	N	O	T	E	B	O	O	K
M	V	L	G	Y	T	S	U	F	N	C	J	F	G





Unscramble and complete



Solve the jumbled sentences and form a meaningful sentence. Rewrite the sentences in the space provided below.

1. Multimedia. / PowerPoint / is / of / the / not / application

2. Normal / view. / The / the / default / is / view

3. view / show / full-screen / slide. / of / Slide / a / is / the / view

4. Templates / pre-defined / the / designs / styles / or / present / are / are / in / the / not / which / system.

5. Placeholders / such as / clip art, / hold / cannot / text, / objects / etc.





Unscramble and complete



Below written are the names of internet company tycons from all around the globe.
Rearrange and solve them to make meaning full names.

1. ASYAT ADNLAE

2. ARSNDU AIHIPC

3. EFFJ EBZSO

4. LBIL GTASE

5. ESVET OBJS

6. NOEL MUKS

7. UARLH AHRAMS

8. DIVAD PARACKD

9. NJENSE UNAHG

10. DERARANN SSNALA

11. ONTY EHNC





Fill and complete



Fill in the blanks with the appropriate answers.

1. The earliest device to qualify as a digital computer was known as _____.
2. The first mechanical calculator was developed by _____.
3. Pascaline was developed by a French philosopher and mathematician named _____.
4. The _____ computer, the world first general purpose mechanical digital computer developed by Howard H. Aiken.
5. _____ is a word processing software.
6. The default file extension of ms word is _____.
7. Microsoft PowerPoint provides some predefined category-based images that can be accessed by using _____ option.
8. Power point is an/a _____ software.





Fill and complete



Fill in the blanks naming the correct inventors to their inventions.

1. _____ is considered to be the father of modern digital computers.
2. The first microprocessor intel 4004 was designed by _____.
3. Computer graphics were developed by _____.
4. The computer keyboard was invented by _____.
5. The father of computer mouse is known as _____.
6. The laptop computer was invented by _____.





Identify and write



Write true or false after reading the following sentences.

1. Fifth generation computers possess artificial intelligence. _____

2. Computers can be classified into the following two, analog and digital. _____

3. The MS word file extension is .pdf. _____

4. CTRL+ N is the shortcut for a new file. _____

5. CTRL + ESC to exit a file. _____

6. MS PowerPoint is an application software. _____

7. MS excel helps with mathematical problems. _____

8. Control panel can be used to personalize wallpaper on a computer. _____





Fill and complete



Answer the following questions by filling in the blanks.

1. The default file extension of MS Word is _____.
2. For inserting a table click on the _____ tab, in the _____ group, click _____ point to _____ and then click in the desired template.
3. The _____ is the place where the cursor stands, where we can type our texts.
4. To select a line from its beginning to its end, press _____ and then press _____ + _____.
5. _____ is the term used to describe how each page of your document will appear when its printed.
6. _____ determines the distance of the paragraph from either the left or the right margin.
7. The _____ helps us to add, edit texts and other multimedia in the slide.
8. PowerPoint allows us to insert _____ in our slides.





Identify and write



Write the short cut keys for the following commands given below.

1. Open a file

2. Create a new document

3. Display the 'save as' dialogue box

4. Cut

5. Paste

6. Undo

7. Redo action

8. Save a file





Choose and color



From the following questions related to MS excel, color the correct option.

1. Excel is a/an _____ software.

built-in

application

hardware

both a and b

2. By default each excel workbook contains _____ worksheets

three

four

one

five

3. On a worksheet, a width can be specified from _____ to _____.

1-20

0-100

5- 255

none of the above

4. To minimise the ribbon, press _____ + _____

CTRL + F1

CTRL + ESC

CTRL + A

CTRL + F9

5. To select cells while moving down, hold down _____ and press _____ key till the numbers of required cells is selected.

use the mouse
to scroll

shift, down
arrow

down arrow
key

enter, shift

6. Three types of values can be entered in a cell, they are

labels, numbers,
words

labels, values,
formulas

formulas,
text, marks

marks, value,
formulas

7. To get the sum, we first need to select the _____ of cells for which we want the sum and then click on the _____ button.

range, sum

sum, total

range, auto
sum

total, range

8. _____ are the faint lines that appear around cells in Excel 2007. They are used to distinguish cells on the worksheet.

Margin

Side lines

Outer area

Gridlines





Choose and color



Choose and color the correct answer from the options given here.

1. To open a new document, we press CTRL+ N.

True

False

2. The internet helps us to receive and send messages.

True

False

3. Once you have internet connection you need nothing else to access the web.

True

False

4. www.Yahoo.com is a search engine.

True

False

5. The hyperlinks or highlighted keywords and images lead us to the related information.

True

False

6. A presentation cannot be displayed via a projector.

True

False

7. The web consists of information organised into Web pages containing text and graphic images.

True

False

8. Wikipedia is an online chatting website.

True

False

